

Cognitive Abilities Test™ Practice Activities

Form 7

Quantitative Tests

Level 8

CogAT®



Number Analogies


1

	→	
	→	



2

	→	
	→	



3

	→	
	→	



Number Analogies




4

	→	
	→	?



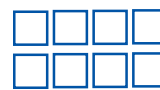

5

	→	
	→	?



6

	→	
	→	?





Number Puzzles

1

$$\boxed{4} = \boxed{2} + \boxed{?}$$

2

3

4

6

2

$$\boxed{5} = \boxed{1} + \boxed{?}$$

3

4

5

6

3

$$\boxed{3} = \boxed{7} - \boxed{?}$$

4

5

6

10



Number Puzzles

4

$$\boxed{9} = \boxed{1} + \boxed{3} + \boxed{?}$$

4



5



6



7



5

$$\boxed{8} = \boxed{6} + \boxed{5} - \boxed{?}$$

11



4



3



2



6

$$\boxed{2} = \boxed{11} - \boxed{7} - \boxed{?}$$

9



6



4



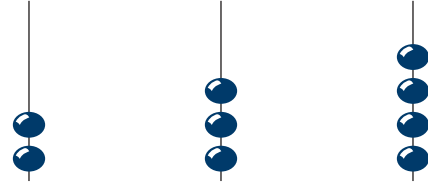
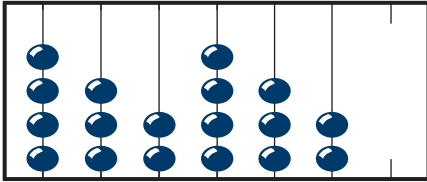
2



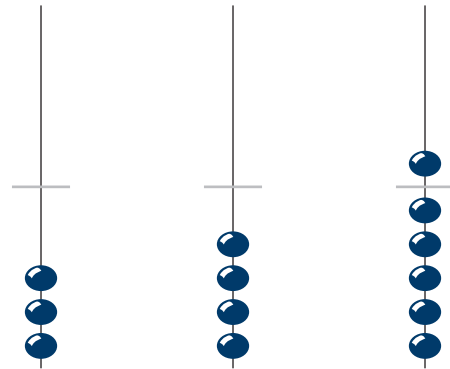
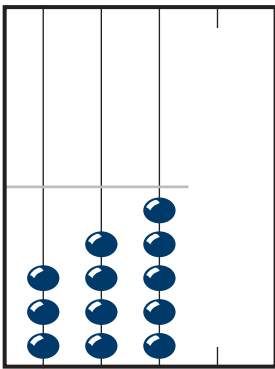


Number Series

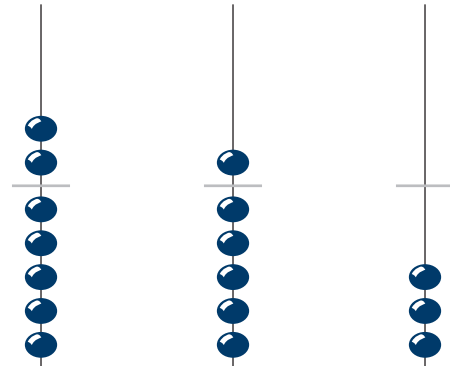
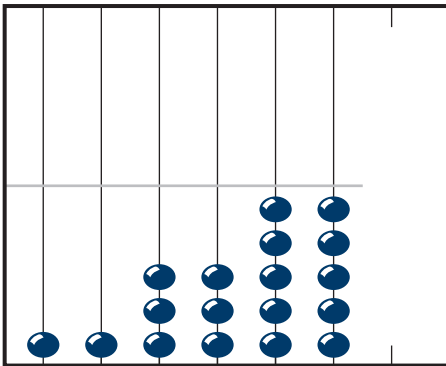
1



2



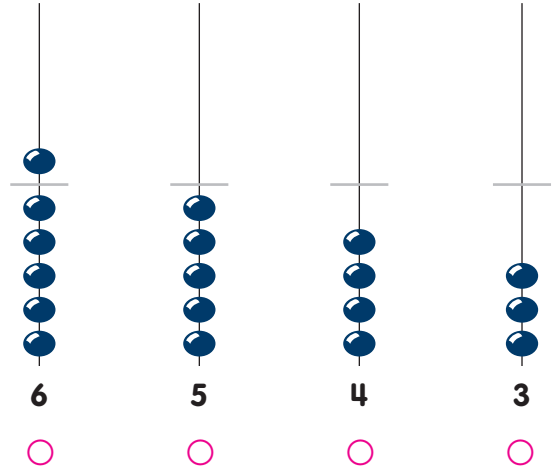
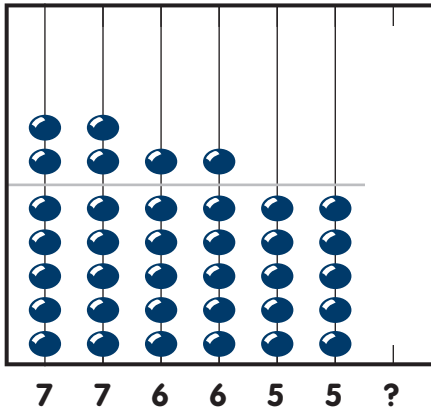
3



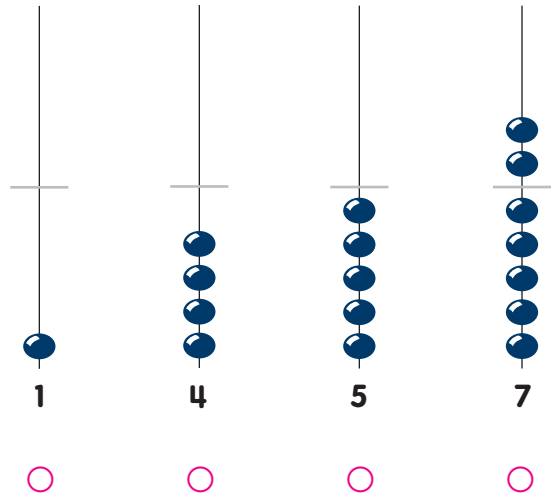
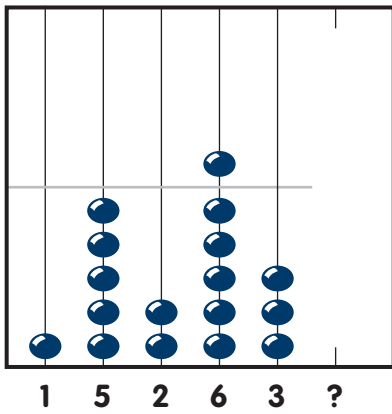


Number Series

4



5



6

